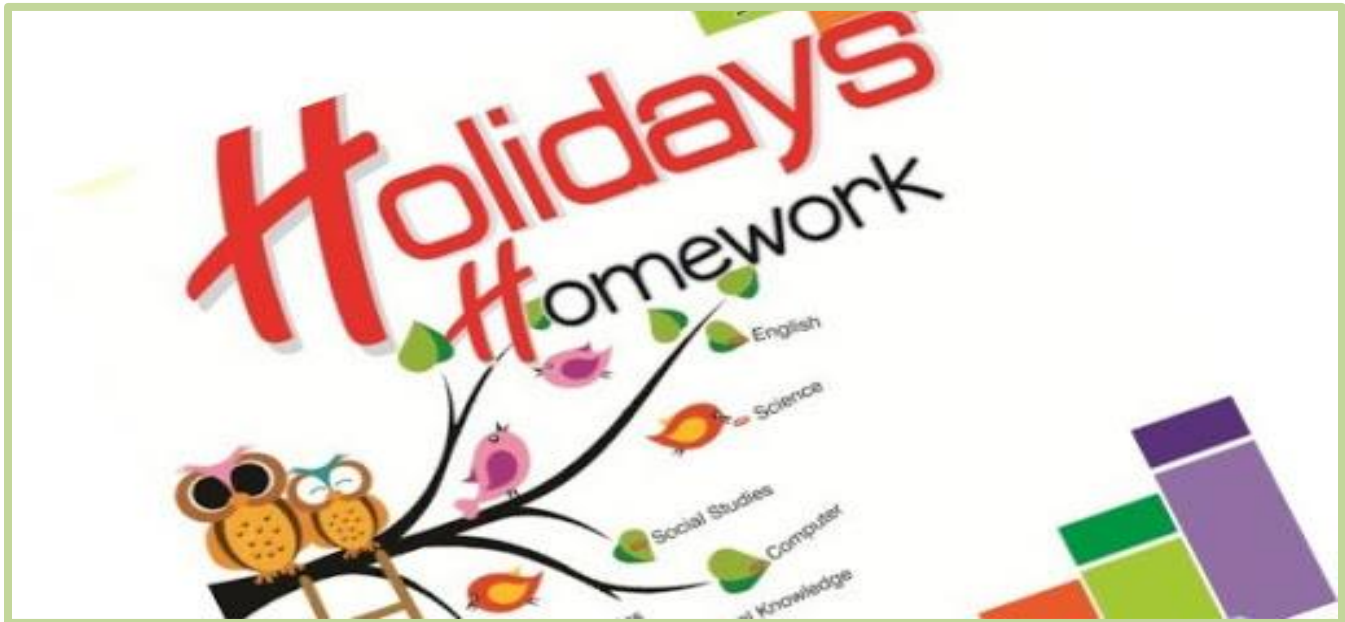


**TDI INTERNATIONAL SCHOOL
SUMMER HOLIDAYS HOMEWORK
SESSION-2021-22
CLASS-V**



Instructions for the Holiday Homework:-

Note: -Holidays Homework carries marks; hence submission of work post vacation is compulsory for all students.

- Written Homework of all the subjects:- Hindi, English, Science, Mathematics, Social Science is to be done as per the instructions.
- The Holiday work must be done in a very neat and presentable manner.
- The child will be assessed for the handwriting, presentation, neatness, completion of all the given instructions, indexing of the work.
- Enrich your vocabulary by learning the vocabulary words from Hindi & English textual books .
- Subject teachers have further imparted specific Instructions for their subjects. Before attempting the question you must read them thoroughly.
- Submit your work on Google classrooms.

Do's and Don'ts for Summer Vacation

Do's:

- Wake up early and develop a morning routine.
- Do yoga, meditation or just a brisk walk.
- Start learning a new skill like painting, dance, music or public speaking.
- Read more-Challenge yourself to finish reading at least a couple of good books during the vacation.
- Help out your parents in family chores, and learn some useful skills.

Dont's

- Do not waste all your time to play video games and/or mobile games.
- Don't go out during the hours of peak sunshine. Try some interesting indoor activities.
- Do not oversleep, and do not let laziness take you over. Stay active during the vacations.

ENGLISH

Name: _____

Date: _____

Instructions for compilation of Holiday Homework:

1. All the students are required to revise the syllabus covered so far thoroughly.
2. All homework is to be done in a thin notebook (separate for English). Students can take printout / handout of the holiday's homework and compiled it in a hard bound file / folder. Design an attractive cover for your file / folder.
3. Remember a well presented "Holiday Home Work" fetches you marks and appreciation of your teachers and classmates.
4. Parents are requested to let their children complete the homework by their own under your guidance.
5. Read Ch – 4, 5 of Carnival book. Underline the new words, write their meaning and make sentences in A4 size ruled sheet.(At least 10 words of both the chapters)
6. Read and complete Ch- 26, 27, 28, 29, 30 in Grammar & Composition book.

Q.1 Rearrange the following sentences:

a. Yesterday place the Moni visited.

_____.

b. Vehicle the stopped policeman the

_____.

c. Drove fast Kapil car the

_____.

d. Rowed boat the quickly boatman the



_____.

e. Flew cage the parrot the from

_____.

ACTIVITY 1: LET'S READ!

Q. 1 Read any one of the books given in the list and complete the BOOK REVIEW given below:



Charlie and the chocolate factory - Roald Dahl
IV - A Little Princess – Frances Hodgson Burnett

My Book report ☆ ☆

My name: _____

The title of my book is: _____

Draw the cover of the book

Character

My favourite character was: _____

Four words about this character:

1. _____
2. _____
3. _____
4. _____

Setting

The character I didn't like was: _____

Four words about this character:

1. _____
2. _____
3. _____
4. _____

This book was:

- Awesome
- OK
- One I didn't like

The story


Beginning Middle End

My favorite event _____

2. Look at the pictures given below and frame the story with the help of the hints.
Write the moral of the story also.

Accident in the canteen

Look at the pictures and helping words below.



join	noodles	lunch	slippery
embarrassed	fall down	grateful	help

Q. Identify the types of sentences:

a. Have you made a decision yet?

b. The girl in the white jacket is lost.

c. The Bulldogs won the game in the last three minutes!

d. Give me a piece of pizza.

e. I did not finish my homework.

f. Where is my science book?

g. Please come with me to the movies.

_____.

h. I made a perfect score on this test!

_____.

i. Why is John late for our date?

_____.

j. Open your locker immediately.

_____.



Q.4 Find the opposite gender of the given nouns in the grid.

Wife, Nun, Lady, Tigress, Authoress, Wizard, Horse, Sir, Daughter, Queen

G	E	N	T	L	E	M	A	N	X
A	B	W	I	T	C	H	U	O	M
M	K	C	G	D	J	W	T	S	A
A	I	F	E	E	K	N	H	Z	D
R	N	G	R	P	M	A	O	T	A
E	G	H	I	S	O	N	R	D	M
H	U	S	B	A	N	D	C	P	Y
Q	B	C	U	V	K	M	R	E	F

ACTIVITY 3: LET'S SPEAK!

Make a short creative video (not more than 60sec.) and give a tribute to frontline corona-virus: Doctors who sacrificed their life while saving patients during the ongoing COVID-19 pandemic.



Subject – Hindi

प्रश्न-1 नीचे लिखी स्थितियों में व्यक्ति कैसा अनुभव करता है , दिए गए स्थानों पर भावों के नाम लिखिए –

(क) जन्मदिन पर तोहफा लेते हुए

(ख) गिर जाने पर

(ग) मैच जीतने पर

(घ) गलती पकड़े जाने पर

(ङ) इनाम मिलने पर

प्रश्न-1 निम्नलिखित संकेतों की सहायता से शब्द पहली हल कीजिए –

(1) आ	(2)		(3)प		
(4)	म	र्थ		(5)अ	
मा		(6)क			(7)लो
(8)	वी				
(9)	र्थ	(10)क		न	

ऊपर से नीचे (पर्यायवाची)

1 गगन

2. अमृत.....

5. घमंड.....

6. स्वर्ण.....

7.ऑख.....

बाएँ से दाएँ (विलोम)

3. उत्थान.....

4. विरोध

8. प्राचीन.....

9. अनर्थ.....

10. सरल.....

Worksheet -2

प्रश्न-1 नीचे लिखे गद्यांश को पढ़कर उसमें आए मुहावरों को लिखिए-

श्रीराम और लक्ष्मण राजा दशरथ की आँखों के तारें थे ।उनका व्यवहार अयोध्या वासियों का मन मोह लेता था । दशरथ द्वारा कैकेयी को दिए वचन को पूरा करने के लिए श्रीराम ने सीता और लक्ष्मण के साथ वन जाने की ठान ली । वन में उन्होंने ऋषि-मुनियों को राक्षसों के भय से मुक्त किया । सीता जी ने कुटिया के बाहर जब स्वर्ण मृग को देखा तो उसे पकड़ने की इच्छा श्रीराम से की पर देखते ही देखते वह वहाँ से नौ दो ग्यारह हो गया ।सीता जी की जिद्द पर श्रीराम ने उसका पीछा किया और स्वर्णमृग के रूप में मारीच को पाकर वे दंग रह गए ।वापिस कुटिया में आने पर सीता जी को वहाँ न पा उनकी आँखों के सामने अँधेरा छा गया । सीता को ढूँढने के लिए उन्होंने आकाश -पाताल एक कर दिया और रावण से युद्ध होने पर उनकी सेना के दौत खट्टे कर दिए ।विभीषण को लंका का राजा बना दिया ।जब वह अयोध्या आए तो अयोध्यावासियों ने घी के दिए जलाकर उनका स्वागत किया ।

.....


.....

.....

प्रश्ननीचे दिए गए चित्र को पहचानिए और पात्र का नाम और उनके जीवन से मिलने वाली शिक्षा लिखिए ।

पात्रों का नाम—.....

शिक्षा—(2)



Worksheet -3

नोट— नीचे लिखे प्रश्नों के उत्तर अलग उत्तर पुस्तिका में लिखिए—

प्रश्न-1 चारों संयुक्त व्यंजनों से शुरु होने वाले दो-दो शब्द लिखिए —

प्रश्न-2 निम्नलिखित शब्दों से भाववाचक संज्ञाएँ बनाइए—

वीर , मीठा , पढना , शांत , कठिन

प्रश्न-3 निम्नलिखित शब्दों के विलोम शब्द लिखिए –

घृणा , नीच , शत्रु , पाप , अनुज

प्रश्न-4 निम्नलिखित शब्दों के वचन बदलिए –

पत्ता , भाषा , नदी , दवाई , रात

प्रश्न-5 निम्नलिखित विराम-चिह्नों का प्रयोग करते हुए प्रत्येक का एक-एक उदाहरण लिखिए –

क पूर्णविराम

ख अल्पविराम

ग प्रश्नसूचक

घ योजकचिह्न

प्रश्न-6 नीचे लिखे वाक्यों में रेखांकित शब्दों के पर्यायवाची बदल कर वाक्य दोबारा लिखिए –

(क) आकाश में पक्षी चहचहाने लगे ।

.....
(ख) रात होते ही चौद भी आ गया ।

.....
(ग) गाय का दूध स्वास्थ्यवर्धक होता है ।

.....
(घ) जगत की रचना ईश्वर ने की है ।

Worksheet -4

नोट- नीचे लिखे प्रश्नों के उत्तर अलग उत्तर पुस्तिका में लिखिए-

प्रश्न-1 निम्नलिखित व्यंजनों के उच्चारण स्थान लिखिए –

ख , छ , ट , ब , घ

प्रश्न-1 निम्नलिखित चित्र को देखकर 25 से 30 शब्दों में एक अनुच्छेद लिखिए -



Worksheet -5

प्रश्न-1 निम्नलिखित शब्दों को वर्णमाला के आधार पर क्रम में लिखिए -

शारदा , डाली , भूमिगत , धन्यवाद , बिजली , जीव-जंतु ,
वरदान , नमक , गणित , खुशहाली ,समृद्धि , फर्नीचर ,
टुकड़ी , घुडसवार ,राजीव , दूध

.....

.....

.....

.....

प्रश्न-2 भगवान सदैव अपने भक्तों की किसी न किसी रूप में रक्षा करते हैं । भक्त प्रहलाद की रक्षा के लिए भगवान विष्णु ने नरसिंह का रूप लिया । इससे संबंधित कहानी को अपने शब्दों में अभ्यास पुस्तिका में लिखो ।

प्रश्न-3 खाली स्थान में उचित शब्द लिखिए -

(क) मेरी.....ने राहगीर कोपिलाया ।(अंबा अंब)

(ख) पक्षी चोंच में भरकरकी ओर उड़ गए ।(नीड , नीर)

(ग) मंदिर में पंडित जी नेकोपत्तियों फूलों की माला पहनाई ।(हरि , हरी)

(घ)में सभी ग्रह.....है । (अ समान , आसमान)

प्रश्न-4 सही मुहावरा छोटकर खाली स्थान भरिए -

नींद हराम करना , नाकों चने चबाना , रफूचक्कर होना , होश उड़ जाना , नाक में दम करना , वीरगति को प्राप्त होना , पानी का बुलबुला , हाथ धोना

(क) क्रांतिकारियों ने अंग्रेज सरकार की

(ख) रानी लक्ष्मीबाई ने अंग्रेजों को

(ग) फैक्ट्री में आग लगने का समाचार सुनकर सेठ जी के

(घ) बिल्ली को देखकर चूहा

(ङ) शरारती विद्यार्थियों ने शरारतें कर करके अध्यापिका की

(च) अपने जीवन से मोह मत रखो वह तो.....

Worksheet -6

नोट- नीचे लिखे प्रश्नों के उत्तर अलग उत्तर पुस्तिका में लिखिए-

प्रश्न-1 प्रतिदिन एक सुलेख लिखो ।

प्रश्न-2 प्रतिदिन समाचार पत्र पढे । पाँच समाचार की तस्वीर कॉपी में चिपकाएँ

प्रश्न-3 आपके पिता जी आपको प्रतिदिन योगासन करवाते हैं और उनके लाभ बताते हैं । एक दिन की विडियो बनाकर शेयर करें ।

प्रश्न-4 एक स्वरचित कविता लिखो

Class-V

Subject-Mathematics

Do all the work in a separate notebook of fewer pages.

1. Revise ch-1,2,3(factors) .
2. Do worksheets given on page 15 and 33 in that separate notebook.
3. Do word problems given on pg-30 from your text book. Students having odd roll no. they do Q1,3,5,7,9,11,13,15 means odd no. of question and students those who are having even no. of roll no. they do Q2,4,6,8,10,12,14 means even no. of questions.

ACTIVITY WORK

1. Make a chart on place value system of numeration. It should be attractive.
2. Make a chart on story problem of any one operation.
Roll no. 1 to 13 ADDITION
Roll no. 14 to 27 SUBTRACTION
Roll no. 28 to 41 MULTIPLICATION
Roll no. 42 to 54 DIVISION
3. Make a chart on Divisibility rules.
4. Write properties of addition, subtraction, multiplication and division on separate A4 sheets and make it colourful as well.

PROJECT WORK-1

Design Spiked Abacus

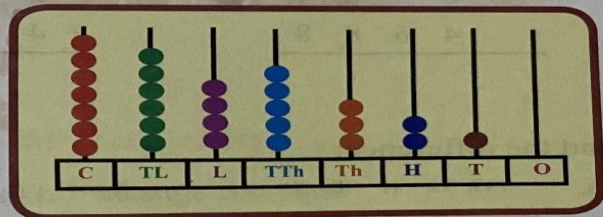
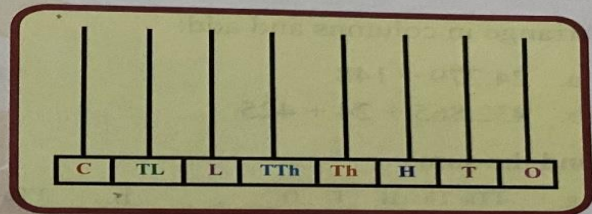
Material Required: Empty toothpaste box, glue, drinking straws, Chart paper, beads.

Activity:

- Take an empty toothpaste box.
- Wrap the box with a chart paper.
- Wrap eight small holes on the top part of the toothpaste box and mark the places as shown right.
- Put the straws on the holes and stick them using glue.
- Now form an 8-digit number using 0, 1, 2, 3, 4, 5, 6, 7.
- Now represent the number using spiked abacus.

For example, the number is 76453210.

- Draw a place value chart to represent the same number.
- Write successor and predecessor to the number formed by you.



Project work -2

Prepare the below table on art sheet.

Find the prime numbers using Sieve of Eratosthenes. Cross out all the composite numbers and colour all the prime numbers in yellow.

1	2	3	4	5	6	7	8	9	10
11	12	13	14	15	16	17	18	19	20
21	22	23	24	25	26	27	28	29	30
31	32	33	34	35	36	37	38	39	40
41	42	43	44	45	46	47	48	49	50
51	52	53	54	55	56	57	58	59	60
61	62	63	64	65	66	67	68	69	70
71	72	73	74	75	76	77	78	79	80
81	82	83	84	85	86	87	88	89	90
91	92	93	94	95	96	97	98	99	100

1. Prime numbers between 1 and 100 is

1. 17 is a _____ number.

2. 36 is a _____ number.

WORKSHEET

1. Write the place and face value of the underlined digits:

- a. 38,647,824 b. 528,600,293 c. 10,957,246

2. Write the following numbers in the standard form:

- a. 300000000 + 50000000 + 500000 + 2000 + 900 + 80 + 3
b. 800000000 + 60000000 + 4000000 + 20000 + 300 + 60 + 8
c. 40000000 + 7000000 + 200000 + 60000 + 5000 + 300 + 80 + 4

3. Fill in the box with <, >, or =:

- a. 6,89,27,570 6,93,00,265 b. 24,80,59,263 28,90,82,653
c. 8,32,64,065 8,07,93,059 d. 3,00,84,715 3,00,84,715

4. Write the predecessor and successor to the following numbers:

- a. _____ 38,64,20,090 _____
b. _____ 1,02,48,650 _____
c. _____ 6,42,35,600 _____

5. Mark the periods with commas according to Indian place value system:

- a. 352648012 b. 43864620 c. 579820641

6. Mark the periods with commas in the International system:

- a. 86295129 b. 324780657 c. 248796534

7. Write the difference in place values of the two coloured digits **89305,427**.

WORKSHEET-2

1. Add:

a. $96,95,769$ and $32,769$

b. $44,26,840$ and $2,15,903$

2. Subtract:

a. $3,43,825$ from $26,209$

b. $8,44,612$ from $94,801$

3. Find the product:

a. $69,284 \times 83$

b. $42,693 \times 128$

4. Find the quotient and verify your answer:

a. $7,82,431 \div 48$

b. $83,640 \div 146$

WORKSHEET-3

1. The number name for $57,24,83,204$.

2. The place value of 8 in $56,89,609$ is _____

3. Put commas to separate the periods in the international system for 592640789

866905431

90005600

67009346

Place Value Chart								
Millions			Thousands			Ones		
Hundred Million	Ten Million	Million	Hundred Thousands	Ten Thousands	Thousands	Hundred	Tens	Ones
100,000,000	10,000,000	1,000,000	100,000	10,000	1,000	100	10	1

4. The successor to $67,89,677$ is _____

5. The predecessor of $89,89,678$ is _____

6. The expanded form of $89,67,009$ is

7. Write the following numbers in Indian place value chart.

56780023

67132406

870345879

600067452

Crores		Lakhs		Thousands		Ones		
Ten Crores (TC) (10,00,00,000)	Crores (C) (1,00,00,000)	Ten Lakhs (TL) (10,00,000)	Lakhs (L) (1,00,000)	Ten Thousands (TTh) (10,000)	Thousands (Th) (1000)	Hundreds (H) (100)	Tens (T) (10)	Ones (O) (1)

8. Write the place value of all digits of the number 67098345 .

6	7	0	9	8	3	4	5
----------	----------	----------	----------	----------	----------	----------	----------

9. Form the smallest 7 or 8-digit number using digits given without repetition

2,9,0,5,7,8,1

4,0,8,6,1,3,7

Form the smallest 8-digit number using digits given with repetition.

2,8,0,9

4,5,9,7

9. Round off the numbers to the nearest 10's.

56,89,345

2,67,461

10. Round off the numbers to the nearest 100's

67,09,345

7,09,781

5. _____ is neither prime number nor composite number.

6. Choose which one of them is not a prime number.

23

67

19

45

7. The factors of 56 are _____

8. The factors of 81 are _____

9. List all the prime numbers between 1 to 40.

10. Write three properties of multiples of factors. (on pg 36 in book)

Factors	Multiples

11. True or false.

Is 1 a factor of every number?

The smallest factor of a number is 2?

Is 9 a prime number.

All prime numbers are odd numbers.

Is 36 divisible by 2?

12. Use divisibility test, Tell whether it is divisible by following number or not.

345 is divisible by 5.

78056 is divisible by 2.

4098 is divisible by 9.

2400 is divisible by 10.

67698 is divisible by 3.

WORKSHEET-5

1. Multiply the followings.

$$4784 \times 19$$

$$508 \times 67$$

2. Divide and write quotient and remainder.

$$287093 \div 27$$

$$7801269 \div 15$$

3. A baby blue whale drinks around 200 L of milk in one day. Just imagine how much milk that is! Find out how many days your family would use 200 L milk. How much milk would the baby blue whale drink in eight months.

4. Sukhi works on a farm. He is paid Rs 98 for one day. If he works for 52 days, how much will he earn?

SCIENCE

- The Summer Holiday Homework includes-
- Worksheets
- Charts
- PPT
- Read all concepts done till now

WORKSHEET 1

1. Fill in the blanks.

- Fish have _____ to breathe.
- Reptiles, birds and mammals breathe through _____.
- Two limbs in front are called _____ and two at the back are called _____.
- Butterfly have a long coiled tube like structure called _____ to suck nectar from flowers.



2. Tick (✓) the correct word.

- (Herbivores / Carnivores) have sharp pointed teeth for tearing the flesh.
- Paramecium breathe through its (lungs / body surface.)
- Frogs jump on land with the help of (wings / hindlimbs)



3. Define.

- Habitat
- Endangered Animals
- Amphibians

4. Answer the questions in one or two sentences.

- How do fish move in water?



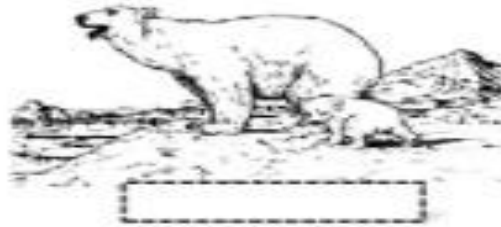

b. Why do animals move from one place to another?

WORKSHEET 2

I. Label the habitat.

Type in the name of the habitat under each picture.

Desert Grassland Rainforest Arctic Ocean



Forest Animals

Circle the names of the animals in the word search.

A	C	A	R	D	I	N	A	L	C	L	A	P	E
G	H	E	B	R	O	W	N	B	E	A	R	O	M
O	A	S	U	G	R	A	C	F	R	B	U	R	V
S	P	E	J	O	P	R	H	A	T	M	I	C	A
S	K	I	O	S	Q	U	I	R	R	E	L	U	P
O	A	U	Q	E	T	R	P	S	C	A	G	P	H
K	H	O	N	D	K	K	M	A	H	G	R	I	O
S	Q	U	T	K	Z	L	U	X	C	L	W	N	S
A	R	A	C	C	O	O	N	L	T	E	N	E	I
G	E	R	T	R	F	A	K	W	Y	M	B	A	N

squirrel
cardinal
raccoon
porcupine

eagle
skunk
chipmunk
brown bear



WORKSHEET 3

Draw a line to match each animal to its habitat.



For each habitat, draw one more animal that might live there.

WORKSHEET 4

Name: _____

Habitats

Places where animals live are their habitats. Animals live in many places all over the world. Some animals live in water, and others live on land.

Circle all the water habitats that some animals can live in.

desert ocean pond tree lake river

Circle the places that are land habitats.

forest underground puddle tree cave ocean

Look at these animals. Write the word water under the animals that live in water. Write the word land under the animals that live on land.

Sea Horse



Dog



Goldfish



Sea Turtle



Butterfly



Horse



© 2011 Heather Mokey

Ocean Animals

Circle the names of the animals in the word search.

H	A	R	T	S	B	A	Y	U	H	A	B	W	E
E	N	U	R	C	H	I	N	S	C	H	A	G	S
R	A	T	H	B	A	L	I	E	Q	W	S	O	E
M	I	D	H	A	P	F	E	D	S	U	Q	F	A
I	M	Q	C	O	R	A	L	M	H	F	U	G	T
T	H	R	E	A	E	P	N	Y	A	J	I	V	U
C	A	R	T	L	T	A	S	O	R	I	D	E	R
R	N	S	E	P	K	R	C	E	K	T	G	K	T
A	F	V	D	C	S	Q	U	S	A	U	I	D	L
B	H	O	B	L	U	E	W	H	A	L	E	H	E

blue whale

hermit crab

coral

starfish

squid

harp seal

urchin

shark

sea turtle

WORKSHEET 5

ANIMAL HABITATS

1. Read the following texts about animal habitats.

DESERTS

Deserts are usually hot and very dry. It's difficult for trees to grow and many plants are small. Many desert animals are nocturnal. It's colder and more comfortable for animals at night. Jerboas live in deserts. They're nocturnal herbivores. They've got two short legs, two long legs and a long tail. Their tails are longer than their bodies! They can jump and run fast to escape carnivores. Camels, scorpions and lizards live in deserts too.



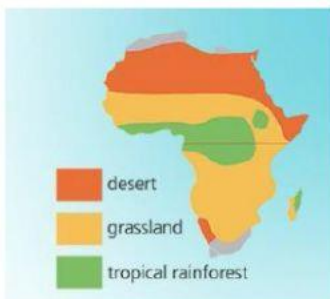
GRASSLANDS

Grasslands have lots of grass and some trees. They have a rainy and dry season. The dry season is longer than the rainy season.

Giraffes and zebras live in the grasslands and eat plants. Leopards, cheetahs and lions hunt these herbivores. Gazelles live in the grasslands too. They've got strong legs and they can run faster than lions.

TROPICAL RAINFORESTS

Tropical rainforests are near the equator. They're hot and rainy all year. There are lots of plants and the trees are taller than in the grasslands. Gorillas, chimpanzees and leopards live in tropical rainforests. Okapis live in tropical rainforests too. They've got big ears and long tongues. They can hear leopards from a long distance and run away.



1. In the text are mentioned 13 animals. Can you write all of them?

Subject – Social Science

- The Summer Holidays Homework includes-
- Worksheets
- Activities
- Read all the chapters done till now.
- Homework is a part of internal assessment and is mandatory for all to submit

Worksheet -1

1. Compare maps and globes.

a) They represent the Earth as it really is.

maps globes maps and globes.

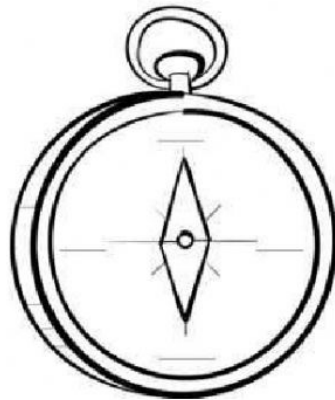
b) They represent the world as flat.

maps globes maps and globes

c) They have lines of longitude and latitude.

Maps globes maps and globes

2. Write the cardinal points on the compass.

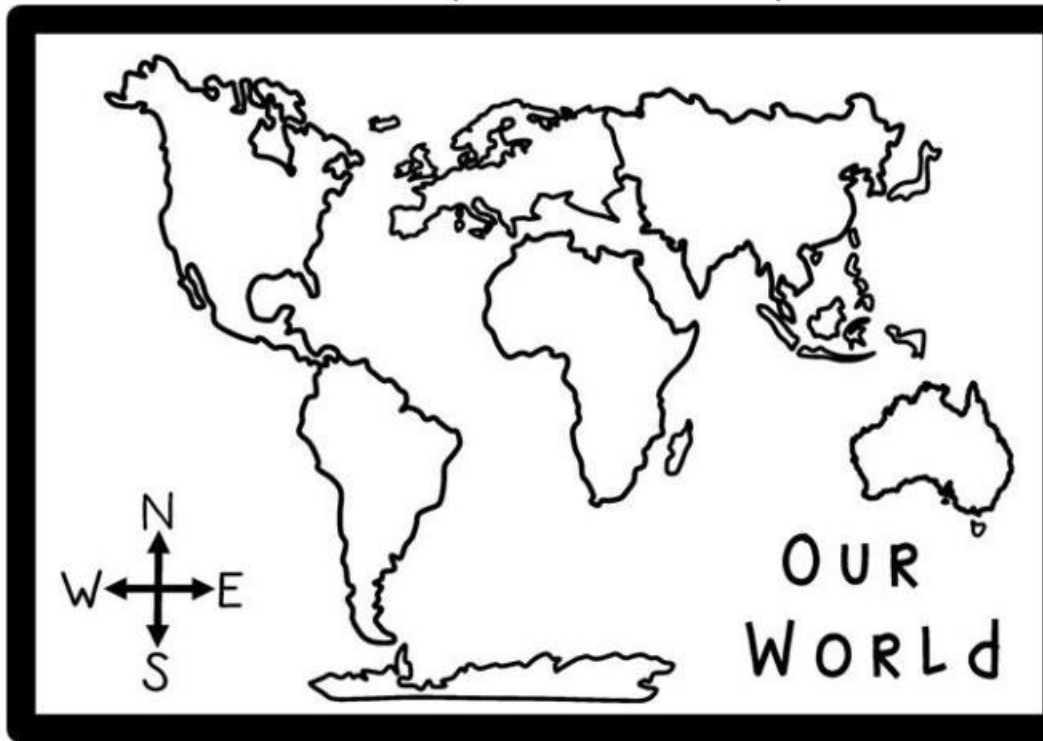


Worksheet -2

Name _____

Color the Continents

Use the key to color in the map.



South America – PINK

Asia – RED

Antarctica – ORANGE

Africa – YELLOW

North America – GREEN

Europe – PURPLE

Australia – BROWN

Oceans – BLUE

Worksheet -3

MOTIONS OF THE EARTH

Very Short Answer Questions

1. Fill in the blanks-

- (i) Revolution is the moment of the earth around the _____.
- (ii) Rotation is the moment of earth on its _____.
- (iii) The earth completes on revolution of the sun in _____ days.
- (iv) The earth takes _____ hours to rotate around its axis.

Answer-

- (i) Sun
- (ii) Axis
- (iii) 365
- (iv) 24 hours

2. State true and false.

- (i) The sun revolves around the earth.
- (ii) There are nine planets in our solar system.
- (iii) Poles experience 6 months nights and 6 months day.
- (iv) Direct rays of the sun fall on the equator on 21 June.

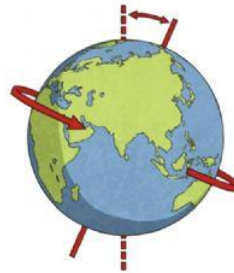
Worksheet -4

MOVEMENTS OF EARTH (I)

ONE. Complete the text with the words in the box..

ROTATION SPACE INTERSECTS NIGHT
24 HOURS NORTH AXIS

The Earth's movement through affects life on Earth. We experience day and because of this movement on the Earth's known as It takes the Earth to rotate one time in which we experience day and night. The Earth's axis is an invisible line that the Earth through both the and South Poles.



TWO. Read the sentences and choose True or False.

1. The side of the Earth not reached by the Sun's rays experiences daytime.

True False

2. The sun rises in the East and sets in the West.

True False

3. The axis extends from North to South.

True False

4. It takes the Sun 24 hours to rotate around the Earth.

True False

Activity -1

• FOOD PLATTER

- (a) Paint a plain paper plate with any bright fabric paint.**
- (b) Let it dry for 3-4 hours.**
- (c) Paste the pictures of 5 popular dishes of the continent allotted to you.**

Roll No.

1 – 10 -Asia

11– 20 -Africa

21 -30- Australia

31-40 - Europe

41-52- North America

SUBJECT: COMPUTERS

1. Identify the images of computers on the basis of :

- i) **Technology** (All three types- Analog, Digital, Hybrid)
- ii) **Size** (All four types- microcomputer, Minicomputer, Main Frame computer, Supercomputer)

Collect pictures from newspapers, magazines and from books which are not in use and paste the pictures of each on A-4 size sheet.

2. Solve the worksheet

Choose the Correct Option

1. A worksheet is also called _____.
- a) Spreadsheet b) Tax sheet c) Bedsheet

Correct Option is:

2. *Alt + F4* key is used to _____ Excel.
- a) Exit b) Create New c) Open

Correct Option is:

3. The cell with a dark boundary is called _____.
- a) New cell b) Active cell c) Cell Address

Correct Option is:

4. A formula always starts with an _____ sign in MS Excel.
- a) = (Equal) b) % (Percent) c) # (Hash)

Correct Option is:

5. *Ctrl + End* key used to go to _____ of the worksheet.
- a) Start b) End c) Middle

Correct Option is:

6. An MS Excel document is called _____.
- a) Worksheet b) Workbook c) Wordpad

Correct Option is:

7. A worksheet is a _____ in a workbook.

- a) Single page b) Row c) Active cell

Correct Option is:

8. The area formed by intersection of a row and column is called _____.

- a) Range b) Cell c) Sheet

Correct Option is:

Fill in the Blanks

1. A cell can contain upto _____ characters.

Answer is:

2. The area formed by intersection of a column and row is known as _____.

Answer is:

3. A _____ contains the data in the form of row and columns.

Answer is:

4. Each cell has its own _____ for reference.

Answer is:

5. A collection of worksheets is called _____.

Answer is:

6. Title bar contain minimize, maximize and _____ buttons.

Answer is:

7. A _____ is a mathematical expression to perform calculations on data.

Answer is:

GK

Read newspaper daily and and past cut outs of 5 of each of the following on an A3 size sheet:

- a) technology news**
- b) sports news**
- c) crosswords given in the newspaper**
- d) national news**
- e) international news**

German

- 1. Draw a Map of Germany and plot 10 famous Cities of Germany in it.**
- 2. Write 10 Animals and 10 Birds Name in German Language with articles.**
- 3. 10 Famous Places of Germany with pictures and 2 lines Description.**
- 4. Learn the Vocabulary of Chapter -1.**

Art and Craft

“Creativity comes from trust. Trust your instincts. And never hope more than

you work.”

Lets have fun with doing art and craft .

Its high time to show your creativity and make your time useful .

Make all drawings neat and clean.

1. The following pages to be done in Art file.

Rainbow, crayon tree, leafy tree, our green friends, jerry and lolly, friendship

2. Make a craft from best out of waste which should be a useful or decorative item.

3. Use white A4 sheets or Art notebook to make following things-

a) Any one bird and animal with crayons or pencil colour shadings

b) Landscape with oil pastels

c) One still life object with pencil shading

d) A fruit basket with at least 4 fruits

***Its mandatory to make borders before drawing on A4 sheets.**

4) Make a paper craft with the help of origami sheets.

<https://pin.it/2iLsOIa>

You can take help from that link or you can check pinterest website on Google.